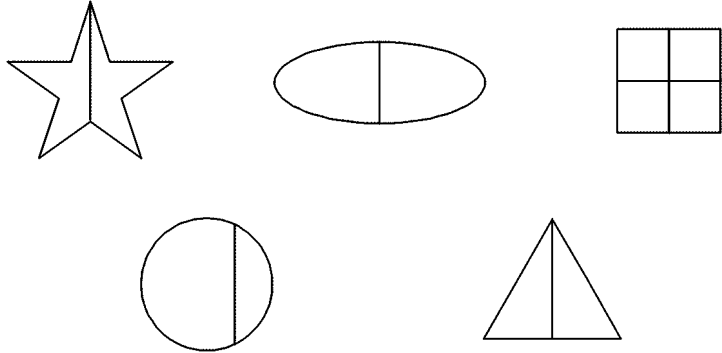


Time: 10 Minutes	Paper Math 2	Total Marks: 10
-------------------------	---------------------	------------------------

3rd Month, 4th Week, 2nd Day	Syllabus: Review Exercise. Q # 2
------------------------------	---

Q.1. Colour the shape that are divided into halves. (10)

ان اشکال کو رنگ کریں جو دو حصوں میں تقسیم کی گئی ہیں۔

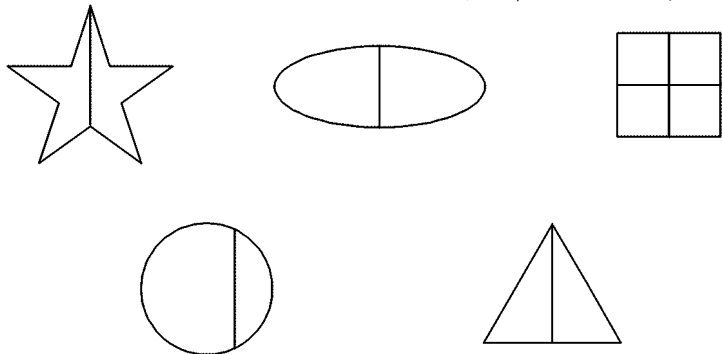


Time: 10 Minutes	Paper Math 2	Total Marks: 10
-------------------------	---------------------	------------------------

3rd Month, 4th Week, 2nd Day	Syllabus: Review Exercise. Q # 2
------------------------------	---

Q.1. Colour the shape that are divided into halves. (10)

ان اشکال کو رنگ کریں جو دو حصوں میں تقسیم کی گئی ہیں۔

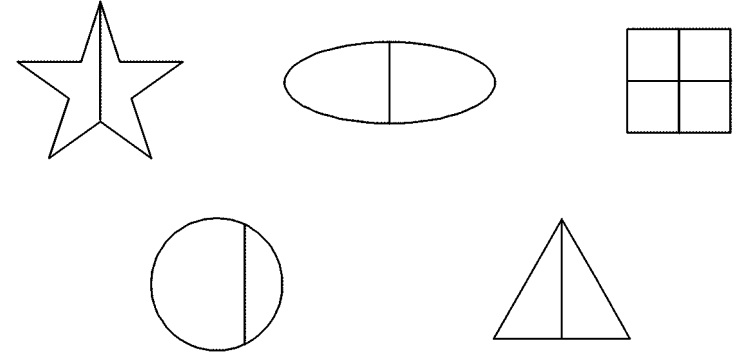


Time: 10 Minutes	Paper Math 2	Total Marks: 10
-------------------------	---------------------	------------------------

3rd Month, 4th Week, 2nd Day	Syllabus: Review Exercise. Q # 2
------------------------------	---

Q.1. Colour the shape that are divided into halves. (10)

ان اشکال کو رنگ کریں جو دو حصوں میں تقسیم کی گئی ہیں۔



Time: 10 Minutes	Paper Math 2	Total Marks: 10
-------------------------	---------------------	------------------------

3rd Month, 4th Week, 2nd Day	Syllabus: Review Exercise. Q # 2
------------------------------	---

Q.1. Colour the shape that are divided into halves. (10)

ان اشکال کو رنگ کریں جو دو حصوں میں تقسیم کی گئی ہیں۔

